


For each question, build a table of values (show your work!) then graph the ordered pairs on the grid.


① $y = 2x - 3$

| x | y |
|----|---|
| -2 | |
| 0 | |
| 2 | |
| 4 | |




② $y = x - 5$

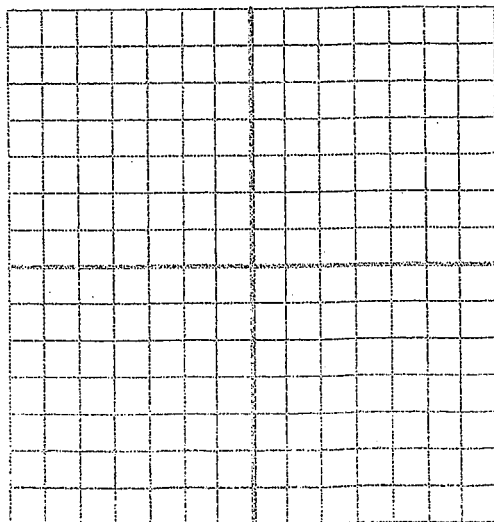
| x | y |
|----|---|
| -2 | |
| 0 | |
| 2 | |
| 4 | |



③ $y = 3x - 1$



④ $y = -2x + 3$



⑤ $y = 4 - x$

